







Math riddle with pictures




3rd class






**Each symbol represents one number.
Try to solve the calculation correctly.**

	+		=	8
---	---	---	---	---


3		7	
-			


		
---	---	---


		
+	3	5

	5	
---	---	---


	=
--	---

	=
---	---

	=
---	---

	=
---	---

	=
---	---

	=
---	---