

Math riddle with pictures

2nd class



**Each symbol represents one number.
Try to solve the calculation correctly.**


16	-		=	7
----	---	---	---	---



	=	
---	---	--

	+		=	
---	---	---	---	---




	=	
---	---	--


	:		=	
---	---	---	---	---

	=	
---	---	--

6	•		=	
---	---	---	---	---

	=	
---	---	--

	+		=	
---	---	---	---	---

	=	
---	---	--