


# Math riddle with pictures

2nd class




**Each symbol represents one number.  
Try to solve the calculation correctly.**

24	-		=	
----	---	---	---	---



	=	
---	---	--


	+	8	=	
---	---	---	---	---




	=	
---	---	--


	:	5	=	
---	---	---	---	---

	=	
---	---	--

	:		=	
---	---	---	---	---

	=	
---	---	--

	•		=	
---	---	---	---	---

	=	
---	---	--