


Math riddle with pictures

2nd class






**Each symbol represents one number.
Try to solve the calculation correctly.**


12	-		=
----	---	---	---


6	:	2	=
---	---	---	---


	=
---	---

	+	11	=
---	---	----	---



	+		=
---	---	--	---



	=
---	---


	:	2	=
---	---	---	---



25	:		=
----	---	--	---



	=
---	---

	•		=
---	---	---	---

	+		=
---	---	--	---

	=
---	---

	•		=
---	---	---	---

	+		=
---	---	--	---

	=
---	---