


Math riddle with pictures

2nd class







**Each symbol represents one number.
Try to solve the calculation correctly.**

10	+	
----	---	---



=	9	•	2
---	---	---	---


	=
---	---

	+	
---	---	---



=		•	
---	---	---	--



	=
---	---


	-	
---	---	---



=	7	•	
---	---	---	--



	=
---	---

	-	
---	---	---

=		•	
---	---	---	--

	=
---	---

	•	
---	---	---

=		•	
---	---	---	--

	=
---	---