






Math riddle with pictures

3rd class




**Each symbol represents one number.
Try to solve the calculation correctly.**

			6
+	2		
		9	9


	=
---	---








	=
---	---

	=
---	---

	=
---	---

	=
---	---

	=
---	---

			
-			
		2	