


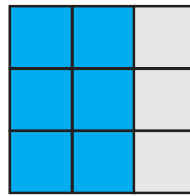
Online School - Fractions

What part of rectangle is shaded?




Fraction is $\frac{\quad}{4}$

3 parts out of 4 equal parts are shaded.




Fraction is $\frac{\quad}{9}$

___ parts out of 9 equal parts are shaded.



Fraction is $\frac{\quad}{\quad}$

___ parts out of 2 equal parts are shaded.



Fraction is $\frac{\quad}{\quad}$

___ parts out of 3 equal parts are shaded.



Fraction is $\frac{\quad}{\quad}$



Fraction is $\frac{\quad}{\quad}$



Fraction is $\frac{\quad}{\quad}$



Fraction is $\frac{\quad}{\quad}$



Fraction is $\frac{\quad}{\quad}$



Fraction is $\frac{\quad}{\quad}$
