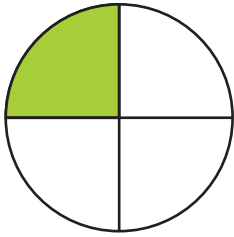


Math online school

Write the fraction of the shapes that is filled in.



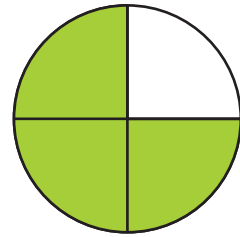
$\frac{1}{4}$



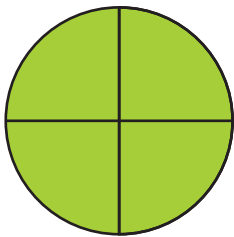
$\frac{\quad}{\quad}$



$\frac{\quad}{\quad}$



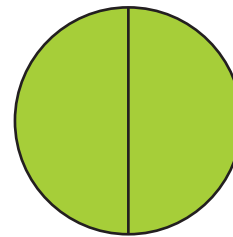
$\frac{\quad}{\quad}$



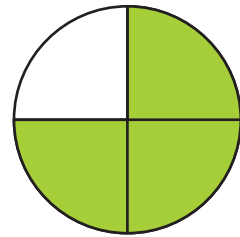
$\frac{\quad}{\quad}$



$\frac{\quad}{\quad}$



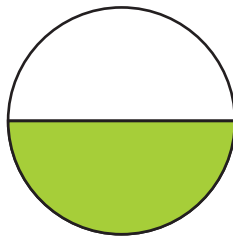
$\frac{\quad}{\quad}$



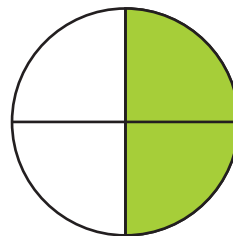
$\frac{\quad}{\quad}$



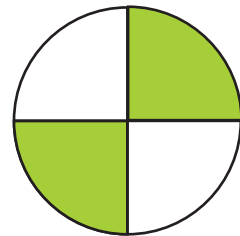
$\frac{\quad}{\quad}$



$\frac{\quad}{\quad}$



$\frac{\quad}{\quad}$



$\frac{\quad}{\quad}$