


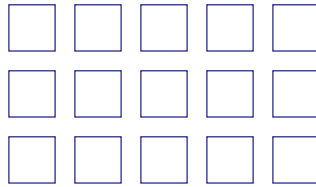
Math online school

Fill in the correct number of squares.

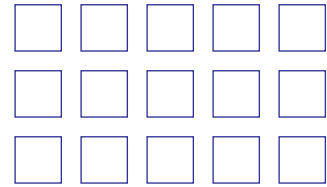
5




7



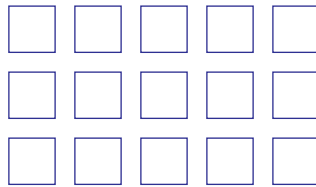
12



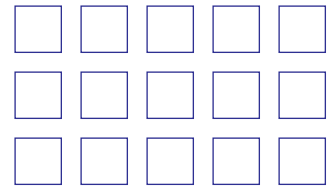
4



8



1



Add!



$$3 + 4 = \square$$



$$3 + 3 = \square$$



$$4 + 2 = \square$$



$$4 + 1 = \square$$



$$2 + 7 = \square$$



$$2 + 3 = \square$$